

Name: _____

Date: _____

Plants Quiz

In the table below, name five different plant parts and explain their job as part of the plant.





| Part | Job |
|------|-----|
| | |
| | |
| | |
| | |
| | |

If you had a white rose, and you needed a blue rose, what could you do? Why would it work?

What are six things plants need to survive?

- | | |
|----------|----------|
| 1. _____ | 4. _____ |
| 2. _____ | 5. _____ |
| 3. _____ | 6. _____ |

Draw and label the four stages of a bean's life cycle.

| | |
|--|---|
|  |  |
|  |  |

Name and describe two ways different plants have adapted to overcome threats to their survival.
