

Name: \_\_\_\_\_

Date: \_\_\_\_\_

# Air and Water Quiz

1. Complete the sentence below:

All things need \_\_\_\_\_ to move.

2. Sort the following into "Natural" things or "Man-Made" things.

Tree

Wind

Rock

Car

Bench

House



Water

Gasoline

Duck


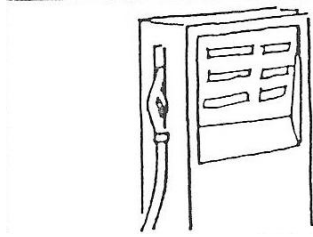
Natural	Man-Made

3. Label the resources shown in the pictures. Circle the renewable resources. (There are 2 more on the back of this page.)




Name: \_\_\_\_\_

Date: \_\_\_\_\_



4. Label the pictures of the wind cycle and the water cycle.

Rain	Green Plants	Sun	Lake	Water Vapour	Clouds
Sun	Warm Air	Cool Air	Wind		



5. How does a tree rely on both the water cycle and the wind cycle?

---

---

---